

APPENDIX PRETEST#1 – NUMBER SENSE

APPENDIX PRETEST#2 - NUMBER SENSE

1. Circle the number five

6

1

5

3

2. Circle the number fourteen

14

63

41

44

3. Circle the smallest number, underline the largest number

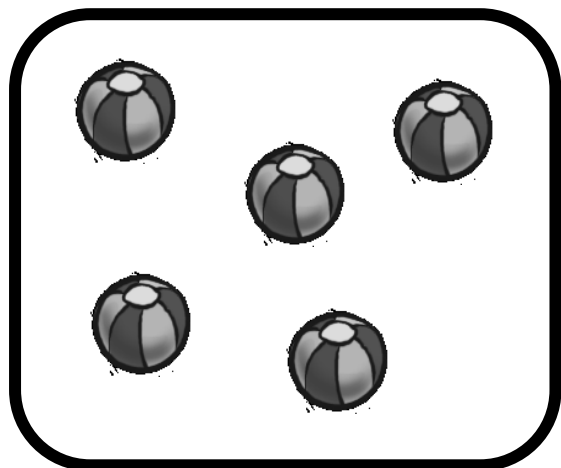
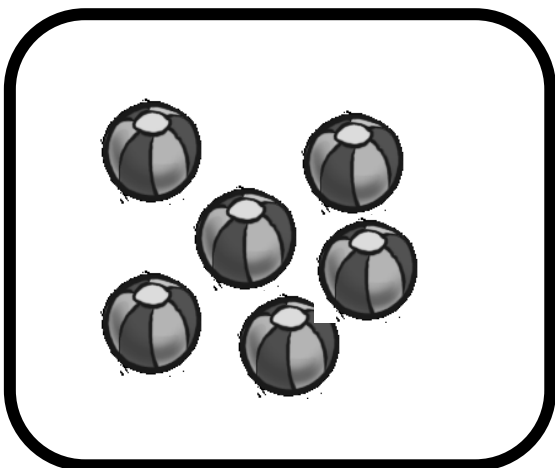
17

24

9

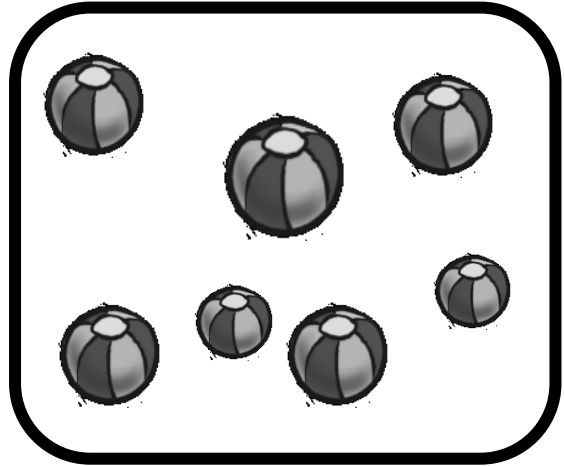
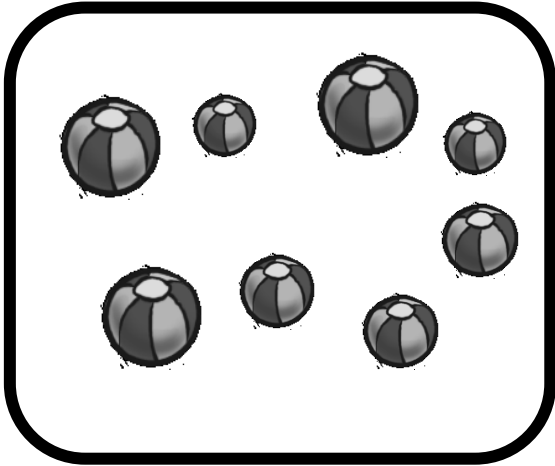
62

4. Circle the square with the largest number of balls



Appendix PRETEST#2 – NUMBER SENSE


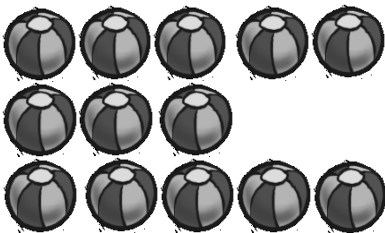
5. Circle the square with the largest number of balls



6. Circle the group of 4 balls



7. Circle the group of 13 balls



Appendix PRETEST#3 – Number patterns

1. Continue the number pattern

23,22,21, _____, _____, _____

2. Continue the number pattern

4,6,8, _____, _____, _____

3. Continue the number pattern

10,15,20, _____, _____, _____

4. Continue the number pattern

18,15,12, _____, _____, _____

5. Continue the number pattern

1,4,7, _____, _____, _____

Appendix PRETEST#3 – Number patterns

6. Continue the number pattern

27, 23, 19, _____, _____, _____

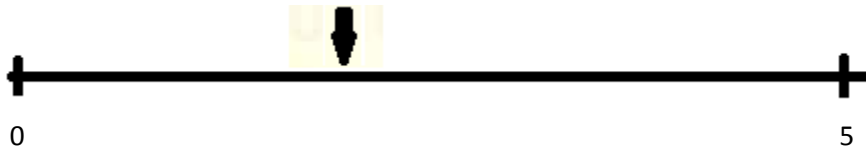
7. Continue the number pattern

4, 9, 14, _____, _____, _____

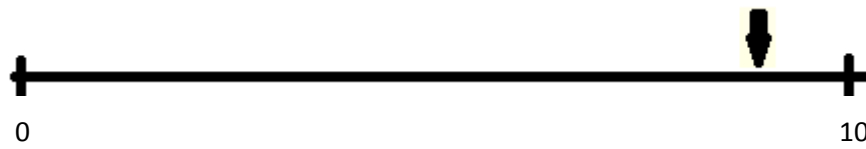
8. Continue the number pattern

64, 56, 48, _____, _____, _____

Appendix PRETEST#4 - The mental number line



1. On what number does the arrow point on the number line? _____



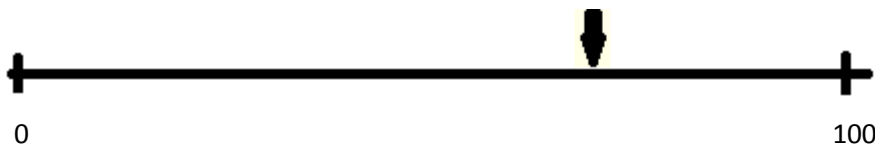
2. On what number does the arrow point on the number line? _____



3. On what number does the arrow point on the number line? _____



4. On what number does the arrow point on the number line? _____



5. On what number does the arrow point on the number line? _____

Appendix POSTTEST#1 – Number sense

Appendix POSTTEST#2 – Number sense

1. Circle the number four

4

8

3

1

2. Circle the number seventeen

44

66

17

47

3. Circle the smallest number, underline the largest number

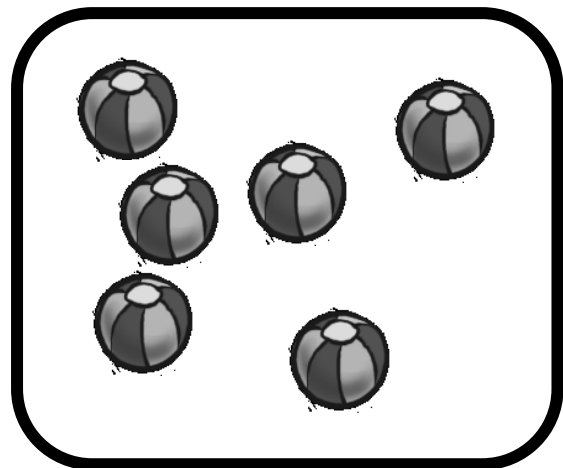
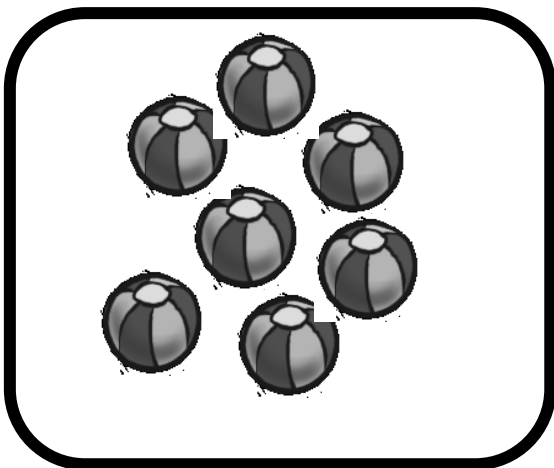
64

8

27

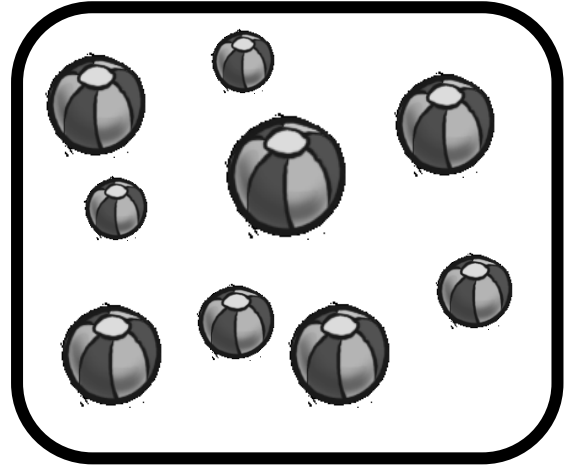
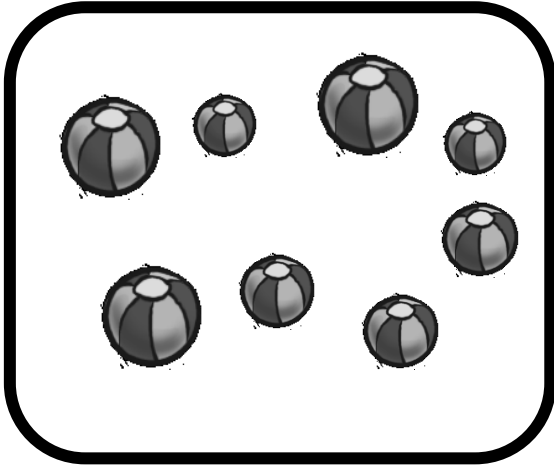
19

4. Circle the square with the largest number of balls



Appendix POSTTEST#2 – Number sense

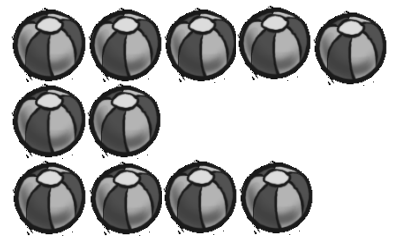
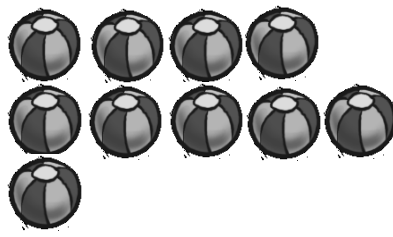
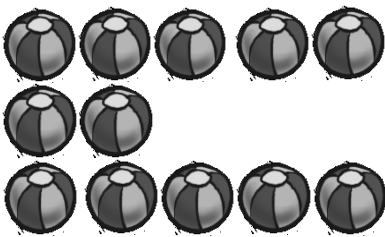
5. Circle the square with the largest number of balls



6. Circle the group with 5 balls



7. Circle the group with 11 balls



Appendix POSTTEST#3 – Number patterns

1. Continue the number pattern

22, 21, 20, _____, _____, _____

2. Continue the number pattern

2, 4, 6, _____, _____, _____

3. Continue the number pattern

15, 20, 25, _____, _____, _____

4. Continue the number pattern

21, 18, 15, _____, _____, _____

5. Continue the number pattern

2, 5, 8, _____, _____, _____

Appendix POSTTEST#3 – Number patterns

6. Continue the number pattern

23,19,15,_____,_____,_____

7. Continue the number pattern

3,8,13,_____,_____,_____

8. Continue the number pattern

49,42,35,_____,_____,_____

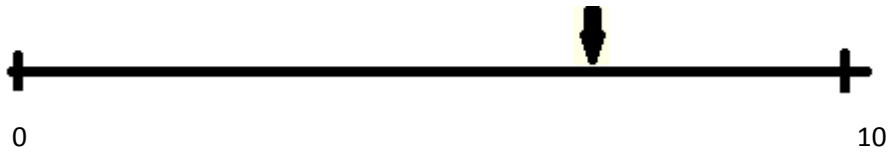
Appendix POSTTEST#4 – The mental number line



1. On what number does the arrow point on the number line? _____



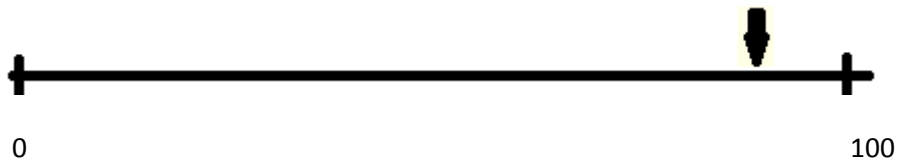
2. On what number does the arrow point on the number line? _____



3. On what number does the arrow point on the number line? _____



4. On what number does the arrow point on the number line? _____



5. On what number does the arrow point on the number line? _____